











English	Work to complete.
<p>Tiger</p> 	<p>Using this picture pick a character and create a character profile about them.</p> <p>Think about the following:</p>
<p>Rabbit</p> 	<p>Who are they? Family? What do they like? What do they not like? Anything special about them?</p>
<p>Dog</p> 	<p>You could display your character profile either in a character description or in a poster. It is up to you how you want to present it.</p> 
<p>Cat</p> 	<p>Using the picture below draw a picture of what you think will happen next after this picture. When you have finished drawing your picture, you can colour it in.</p>
<p>Cat</p> 	

Handwriting	Work to complete.
Joining Group - Mrs Kilner	<p>Continue to practise the 'un' join but now look at Nelson Handwriting Workbook 5 - Unit 2 (page 4 and 5) - 'ig' join.</p> <p>Complete these pages in your workbook.</p>
Letter Formation Group - Miss Struggles	<p>Continue to practise the 'c' and 'a' letters but now look at Nelson Handwriting Blue Level - Unit 2 - 'd and g' letters.</p> <p>Practise the 'd' and 'g' letters in your red/blue book. Can you remember how to form these correctly and where to start without looking?</p>

SPaG	Work to complete.
<p>Tiger</p> 	<p>Complete these questions in your book. Write out the correct answer.</p> <p>1. Which sentence below has been written in the past tense? Tick one.</p> <p>This is the oldest car in the street. <input type="checkbox"/></p>
<p>Rabbit</p> 	<p>The car's engine dates back to 1970. <input type="checkbox"/></p> <p>The wheels were changed in 2014. <input type="checkbox"/></p> <p>The mechanic wants to change the seats. <input type="checkbox"/></p>
<p>Dog</p> 	<p>3. Rewrite the sentence below in the simple past. Remember to use full punctuation.</p> <p>He has walked through the woods.</p>

Phonics

Work to complete

Only the children that have the 'Phoneme sound mat' sheet in their home learning pack.

Dog







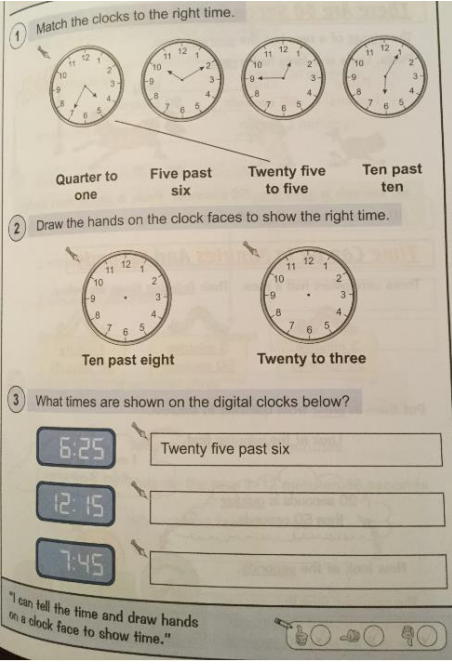


On your phoneme sound mat, say the sound and then the word e.g. 'h' as in hand for each phase.

Fill in the missing words to match the picture.



Cat



<h1>Maths</h1>	<h2>Work to complete</h2>	
<p>Problem of the day Circles, Squares, Triangles and Rectangles</p>	<p>Complete the problem of the day. Show your workings in your red book.</p> <div style="text-align: center;"> <p>Problems of the Day 2020 Day II</p> </div> <div style="display: flex; justify-content: space-between;"> <div style="width: 45%;"> <p>1 Use $<$, $>$ or $=$ to make these number sentences correct.</p> <p style="text-align: center;">$5 \times 7 \bigcirc 40$</p> <p style="text-align: center;">$6 \times 2 \bigcirc 7 \times 2$</p> <p style="text-align: center;">$10 \div 2 \bigcirc 12 \div 2$</p> </div> <div style="width: 45%;"> <p>3 Mr Patel writes a number on the board.</p> <ul style="list-style-type: none"> Lee finds $\frac{1}{2}$ of the number. Kim finds $\frac{1}{4}$ of the number. Lee's answer is 5 more than Kim's. <p>What is the number Mr Patel started with? This bar model may help you.</p> <div style="border: 1px solid black; width: 100%; height: 20px; margin: 5px 0;"></div> <div style="border: 1px solid black; width: 100%; height: 20px; margin: 5px 0;"></div> </div> </div> <p>2 There are 50 children in a school. 15 of the children are girls. How many more boys than girls are in the school?</p> <div style="text-align: right;">  </div>	
<p>Circles</p> 	<p>Maths work:</p> <div style="display: flex;"> <div style="flex: 1;">  </div> <div style="flex: 1;">  </div> </div>	
<p>Squares</p> 	<p>Maths Blast Calculations:</p> <p>$5 + 7 + 2 =$</p> <p>$19 - 7 =$</p> <p>$10 \times 11 =$</p> <p>$15 \div 3 =$</p> <p>$2/4$ of $8 =$</p> <p>$? + 3 = 12$</p> <p>$17 - ? = 9$</p> <p>$? - 10 = 11$</p>	
<p>Triangles</p> 	<p>Using the help sheet on the left, answer the questions on the right in your red/blue book.</p> <p>Maths Blast Calculations:</p> <p>$5 + 7 + 2 =$</p> <p>$19 - 7 =$</p> <p>$10 \times 11 =$</p> <p>$15 \div 3 =$</p> <p>$2/4$ of $8 =$</p> <p>$? + 3 = 12$</p> <p>$17 - ? = 9$</p> <p>$? - 10 = 11$</p>	

Rectangles



Maths work:

Read the help sheet and use this to help tell the time at home.

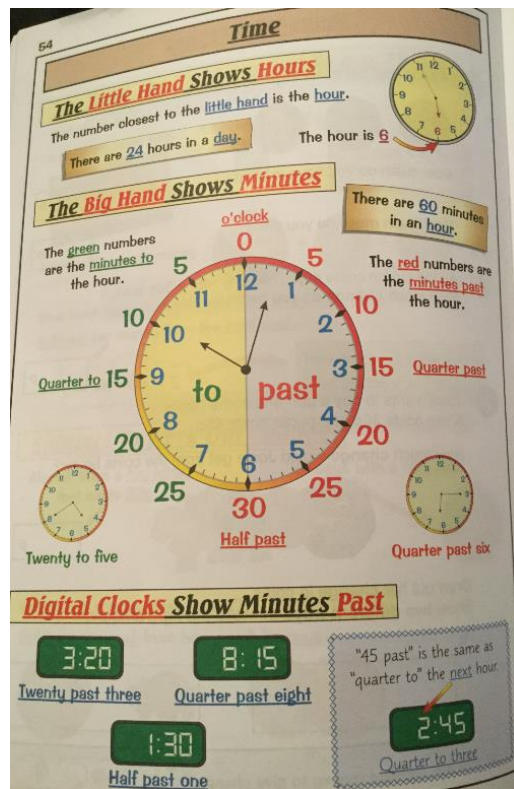
What time did you get up?

What time did you have lunch?

What time did you have tea?

What time did you go to bed?

Make a note of any other specific times that you did something during the day and the activity that you did.



Maths Blast

Calculations:

$$5 + 7 + 2 =$$


$$19 - 7 =$$

$$10 \times 11 =$$

$$15 \div 3 =$$

$$2/4 \text{ of } 8 =$$

Diamonds



Maths work:

Have a discussion with your adult and find out what time you did the following.

- What time did you get?
- What time did you have lunch?
- What time did you have tea?
- What time did you go to bed?

Maths Blast

Calculations:


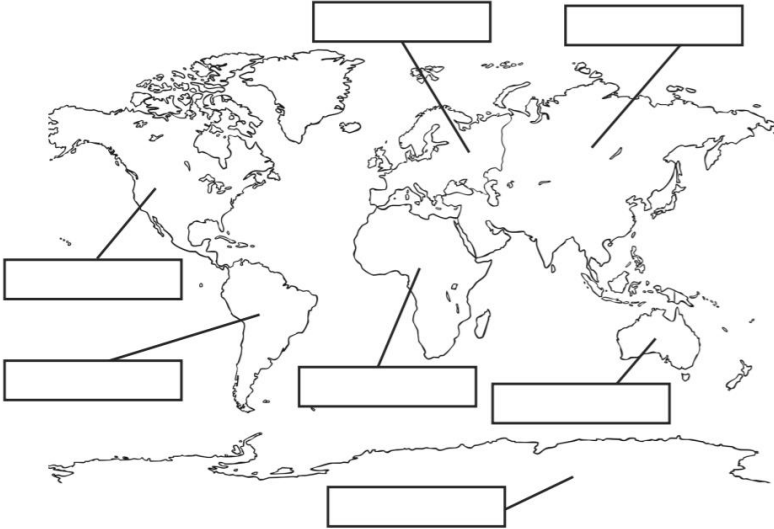
$$5 + 7 =$$

$$11 - 6 =$$

$$2 \times 3 =$$

$$8 \div 2 =$$

Guided Reading	Work to complete.
Group 1	In your KS1 English Comprehension book. Complete the page titled 'How to grow a seed' page 2.
Group 2	Read the text and then answer the questions in the book itself.
Group 3	
Group 4	Go onto your Reading Eggs for 15-30 minutes. How much can you achieve in that time?
Group 5	Read and share a text with a grown up in your house. You can take it in turns to read or you can read the whole book yourself. Remember to use your phonics to sound out words you do not know.

<h1>Topic</h1>	<p>What to do?</p>
<p>All Y2 children</p>	<div style="text-align: center;">  <p>Geography</p> </div> <p>Label the continents of the world, without having to look where they are. Can you remember all of them? Which ones did you forget, if any?</p> <div style="display: flex; justify-content: space-around; align-items: center;">  <div style="border: 1px solid black; padding: 5px; width: 150px;"> <p>Word Bank</p> <p>North America</p> <p>South America</p> <p>Africa</p> <p>Antarctica</p> <p>Australasia</p> <p>Europe</p> <p>Asia</p> </div> </div> <p>Now can you write down the names of all the 5 oceans? How many can you remember?</p>