

Phonics Groups

Work to be completed

Watch the video link below.

<https://www.youtube.com/watch?v=ZojmFjUAGh4>



'ew' Spelling Activity

1. Trace over 'ew'.

ew ew ew ew ew
ew ew ew ew ew



2. Just add 'ew'.

st__

cr__

scr__

ch__

j__el

n__spaper

thr__

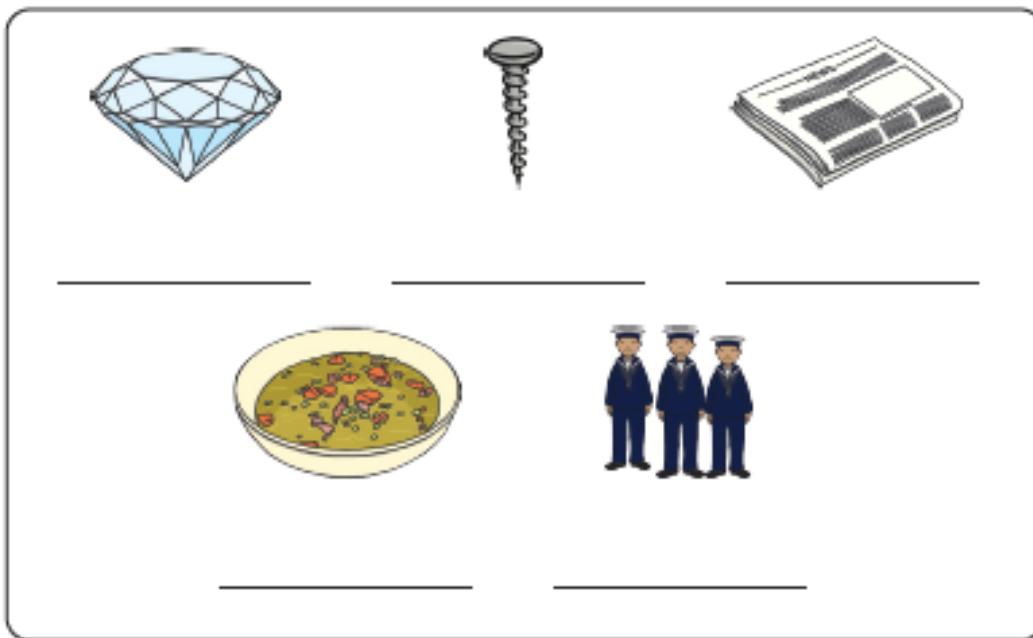
neph__



3. Write the correct 'ew' words under the pictures.









Watch the video link below.



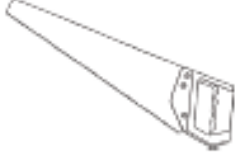






<https://www.youtube.com/watch?v=ZojmFjUAGh4>

Find and Write the 'ew' Words



Write the words and then colour the pictures with an 'ew' sound in them.



 <input type="text"/> <input type="text"/> <input type="text"/> <input type="text"/>	 <input type="text"/> <input type="text"/> <input type="text"/>	 <input type="text"/> <input type="text"/>
 <input type="text"/> <input type="text"/> <input type="text"/> <input type="text"/>	 <input type="text"/> <input type="text"/> <input type="text"/> <input type="text"/>	 <input type="text"/> <input type="text"/> <input type="text"/> <input type="text"/>
 <input type="text"/> <input type="text"/> <input type="text"/> <input type="text"/>	 <input type="text"/> <input type="text"/> <input type="text"/> <input type="text"/>	 <input type="text"/> <input type="text"/> <input type="text"/> <input type="text"/>



English Groups

Work to complete

Tiger



Rabbit



Dog



Mouse



Cat



Using the poem 'If I was a Superhero...' write your own version using this as a template.

If I Was a Superhero...

By Sally Gray

If I was a superhero
I'd definitely fly
Arms outstretched
Racing birds in the sky.

If I was a superhero
I'd have special powers
Like extra strong legs
For jumping over towers.

If I was a superhero
I'd save all the oceans
With my secret and magical
Cleaning up potions.




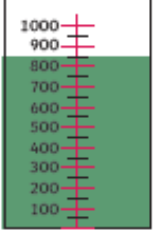

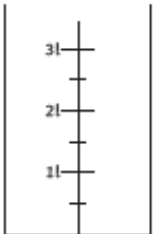

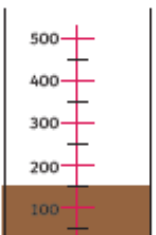














If I was a superhero
I'd save all the trees
And the mountains and rivers,
The birds and the bees.


If I was a superhero
I'd help all the poor,
Give them food,
And make them hungry no more.

If I was a superhero
I'm sure you'll agree
The world would be better
Because of me!



nancy jacobson

<p>Maths Groups</p>	<p>Work to complete</p>							
<p>Circles</p> 	<p>Maths Challenge work: Complete the sheet below relating to capacity.</p> <div style="border: 1px solid black; border-radius: 15px; padding: 10px; text-align: center; margin: 10px 0;"> <p>To estimate and measure volume/capacity in litres and millilitres.</p> </div> <p>Help measure the volume of the containers by reading the scales on the measuring vessels or colouring to show the volume of liquid.</p>	<p>Maths Blast Calculations: $18 + 38 =$ $39 - 18 =$ $5 \times 5 =$ $90 \div 3 =$ $\frac{1}{4}$ of $8 =$ $31 + ? = 52$ $86 - ? = 64$ $? - 45 = 51$ $__ \times 10 = 30$ $10 \div __ = 2$</p>						
<p>Squares</p> 	<table border="1" style="width: 100%; height: 100%;"> <tr> <td style="width: 50%; text-align: center;">  <p>200ml of orange juice</p> </td> <td style="width: 50%; text-align: center;">  <p>_____ ml of apple juice</p> </td> </tr> <tr> <td style="text-align: center;">  <p>_____ ml of water</p> </td> <td style="text-align: center;">  <p>$2\frac{1}{2}$ l of lemonade</p> </td> </tr> <tr> <td style="text-align: center;">  <p>3 l of tomato juice</p> </td> <td style="text-align: center;">  <p>_____ ml of cola</p> </td> </tr> </table>	 <p>200ml of orange juice</p>	 <p>_____ ml of apple juice</p>	 <p>_____ ml of water</p>	 <p>$2\frac{1}{2}$ l of lemonade</p>	 <p>3 l of tomato juice</p>	 <p>_____ ml of cola</p>	<p>Maths Blast Calculations: $18 + 38 =$ $39 - 18 =$ $5 \times 5 =$ $9 \div 3 =$ $\frac{1}{4}$ of $8 =$ $31 + ? = 52$ $46 - ? = 24$ $? - 25 = 31$ $__ \times 10 = 30$ $10 \div __ = 2$</p>
 <p>200ml of orange juice</p>	 <p>_____ ml of apple juice</p>							
 <p>_____ ml of water</p>	 <p>$2\frac{1}{2}$ l of lemonade</p>							
 <p>3 l of tomato juice</p>	 <p>_____ ml of cola</p>							
<p>Triangles</p> 	<p>Once you have completed this sheet you can log into your TT Rockstars account and try to earn some more coins.</p> <p>Remember to complete a soundcheck before you begin.</p>	<p>Maths Blast Calculations: $18 + 8 =$ $29 - 18 =$ $5 \times 5 =$ $9 \div 3 =$ $\frac{1}{4}$ of $8 =$ $21 + ? = 32$</p>						
<p>Rectangles</p> 								

<p>Diamonds</p> 		$26 - ? = 14$ $? - 15 = 31$ $_ \times 10 = 30$ $10 \div _ = 2$
---	--	---

<p>Guided Reading</p>	<p>Work to complete.</p>
	<p>*ALL GROUPS*</p> <p>Log into your Reading Eggs and complete 30 minutes. Make sure that you are completing the reading parts and not just the games.</p>